

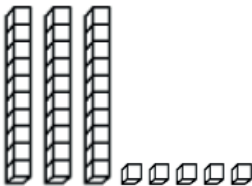
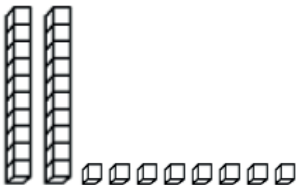
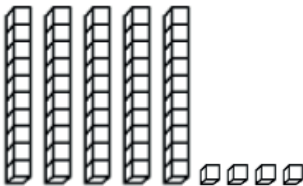
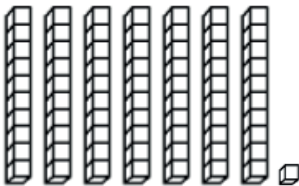

# ÍNDEX      PÀGINA

LES CENTENES.....	1
EL TEMPS.....	51
ELS EUROS.....	64
PROBLEMES.....	68
GEOMETRIA.....	73
SÈRIES.....	76

1

# QUANTS QUADRATS HI HA?

DATA:

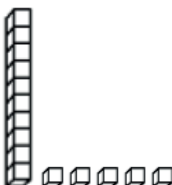

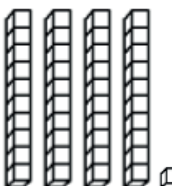

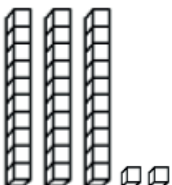




	
	
	
	
	

TOTAL ENCERTS

2

QUANTS QUADRATS HI HA?

DATA:



TOTAL ENCERTS

3

QUANTES UNITATS SÓN ...?

DATA:	
<b>5 CENTENES</b>	
<b>8 CENTENES</b>	
<b>6 CENTENES</b>	
<b>3 CENTENES</b>	
<b>9 CENTENES</b>	
<b>1 CENTENA</b>	
<b>4 CENTENES</b>	
<b>7 CENTENES</b>	
<b>2 CENTENES</b>	
<b>10 CENTENES</b>	

TOTAL ENCERTS

4

QUANTES UNITATS SÓN ...?

DATA:	
<b>1 C + 2 D</b>	
<b>2 C + 5 D</b>	
<b>3 C + 7 D</b>	
<b>4 C + 8 D</b>	
<b>5 C + 1 D</b>	
<b>6 C + 4 D</b>	
<b>7 C + 9 D</b>	
<b>8 C + 6 D</b>	
<b>9 C + 7 D</b>	
<b>1 C + 4 D + 3 U</b>	

TOTAL ENCERTS

5

QUANTES CENTENES SÓN ...?

DATA:	
<b>100 U</b>	
<b>300 U</b>	
<b>800 U</b>	
<b>200 U</b>	
<b>500 U</b>	
<b>10 D</b>	
<b>90 D</b>	
<b>60 D</b>	
<b>40 D</b>	
<b>70 D</b>	

TOTAL ENCERTS

6

ESCRIU L'ANTERIOR

DATA:	
<b>95</b>	
<b>118</b>	
<b>274</b>	
<b>361</b>	
<b>496</b>	
<b>523</b>	
<b>657</b>	
<b>792</b>	
<b>819</b>	
<b>934</b>	

TOTAL ENCERTS

7

ESCRIU L'ANTERIOR

DATA:	
<b>100</b>	
<b>251</b>	
<b>320</b>	
<b>479</b>	
<b>500</b>	
<b>631</b>	
<b>740</b>	
<b>812</b>	
<b>980</b>	
<b>1000</b>	

TOTAL ENCERTS



8

ESCRIU EL POSTERIOR

DATA:	
<b>73</b>	
<b>148</b>	
<b>291</b>	
<b>376</b>	
<b>425</b>	
<b>539</b>	
<b>642</b>	
<b>793</b>	
<b>867</b>	
<b>954</b>	

TOTAL ENCERTS

9

## ESCRIU EL POSTERIOR

DATA:	
<b>99</b>	
<b>186</b>	
<b>237</b>	
<b>399</b>	
<b>402</b>	
<b>563</b>	
<b>609</b>	
<b>700</b>	
<b>825</b>	
<b>999</b>	

TOTAL ENCERTS

10 ESCRIU L'ANTERIOR  
I EL POSTERIOR

DATA:		
	<b>90</b>	
	<b>129</b>	
	<b>216</b>	
	<b>347</b>	
	<b>460</b>	
	<b>519</b>	
	<b>600</b>	
	<b>715</b>	
	<b>850</b>	
	<b>940</b>	

TOTAL ENCERTS

11

SUMA

DATA:	
<b>120 + 10</b>	
<b>280 + 10</b>	
<b>350 + 10</b>	
<b>410 + 10</b>	
<b>560 + 10</b>	
<b>670 + 10</b>	
<b>710 + 10</b>	
<b>830 + 10</b>	
<b>920 + 10</b>	
<b>990 + 10</b>	

TOTAL ENCERTS

12

SUMA

DATA:	
<b>120 + 30</b>	
<b>240 + 50</b>	
<b>350 + 20</b>	
<b>480 + 10</b>	
<b>510 + 80</b>	
<b>640 + 50</b>	
<b>720 + 60</b>	
<b>830 + 30</b>	
<b>910 + 70</b>	
<b>950 + 50</b>	

TOTAL ENCERTS

13

SUMA

DATA:	
<b>60 + 40</b>	
<b>130 + 70</b>	
<b>250 + 50</b>	
<b>380 + 20</b>	
<b>410 + 90</b>	
<b>570 + 30</b>	
<b>620 + 80</b>	
<b>840 + 60</b>	
<b>980 + 20</b>	
<b>950 + 60</b>	

TOTAL ENCERTS

14

SUMA

DATA:	
<b>60 + 50</b>	
<b>130 + 80</b>	
<b>250 + 70</b>	
<b>390 + 40</b>	
<b>460 + 60</b>	
<b>510 + 90</b>	
<b>670 + 40</b>	
<b>740 + 80</b>	
<b>850 + 90</b>	
<b>920 + 30</b>	

TOTAL ENCERTS